

# Fractions

1. What fraction of these pizzas has been eaten? Write your answer in words or fraction numerals.

a.




\_\_\_\_\_

b.



\_\_\_\_\_

c.



\_\_\_\_\_



d.



\_\_\_\_\_

2. What fraction of these shapes is **NOT** shaded yellow?

a. \_\_\_\_\_ b. \_\_\_\_\_ c. \_\_\_\_\_ d. \_\_\_\_\_



3. What fraction of the pizza is left over?



\_\_\_\_\_

4. What fraction of this pizza is left over?



\_\_\_\_\_

5. What fraction of the pizza is left over?



\_\_\_\_\_