

Time

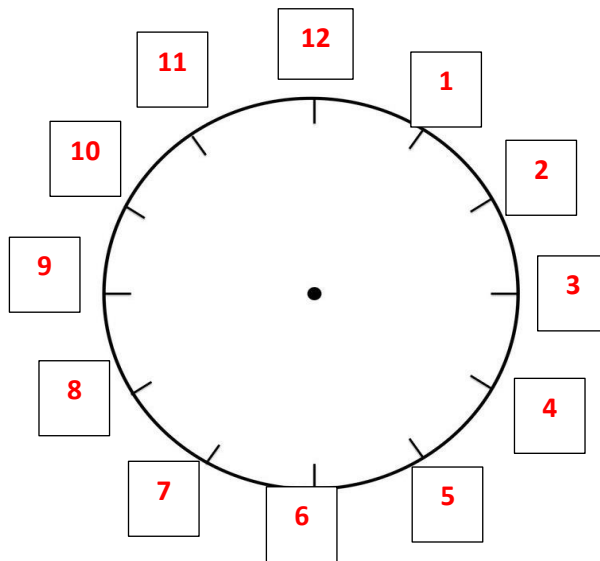
1. Label the type of clocks that you can see below.



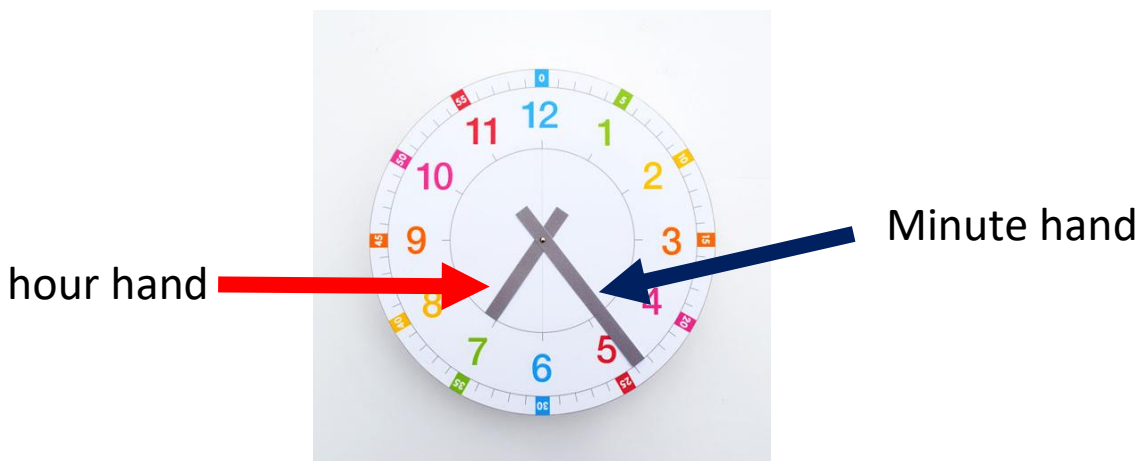
a. **analogue clock**

b. **digital clock**

2. Write the numbers in the correct places on the clock below.



3.



a. Circle the hour hand in red.

b. Circle the minute hand in blue.

c. What is the difference in the size of the hour hand compared with the minute hand? **The minute hand is longer than the hour hand.**

4. True OR False?

- a. Am means morning and pm means afternoon. **true**
- b. Am begins at midday and ends at midnight. **false**
- c. Pm begins at midnight and ends at midday. **false**
- d. The minute hand goes around the clock once every minute. **False**

5. Can you tell the time on these clocks?



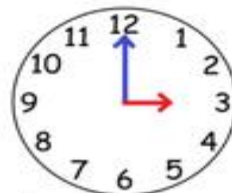
4 o'clock



10 o'clock



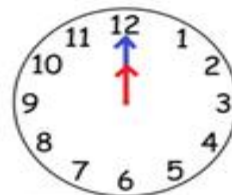
6 o'clock



3 o'clock



8 o'clock



12 o'clock

6. Can you tell the time on these clocks?

Half past 2	8:30 half past 8	9:30 half past 9
4:30 half past 4	11:30 half past 11	6:30 half past 6