

## Grade 5 Fractions Homework 1

1. Draw the following fractions:

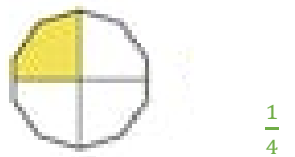
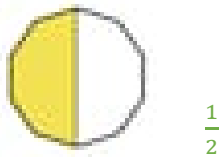
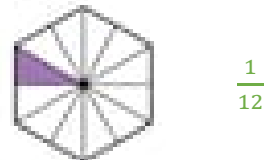

$$\frac{3}{6}$$

$$\frac{2}{8}$$

$$\frac{1}{4}$$

Get your parents to check

2. Name the following fractions



3. If you need to share a slab of chocolate between 6 people, how much of the slab would each person get?

$$\frac{1}{6}$$