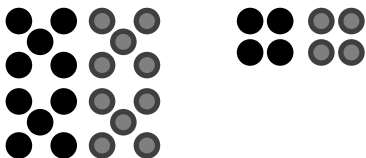

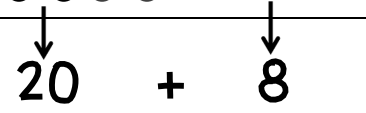
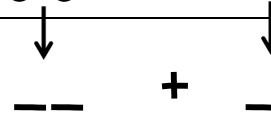



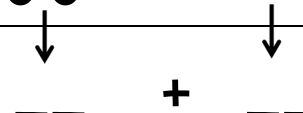


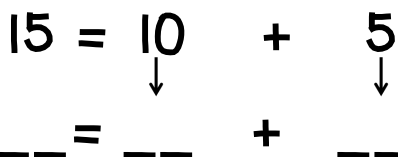
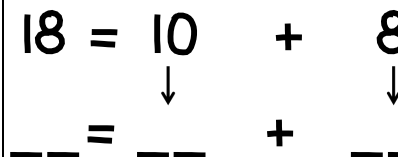
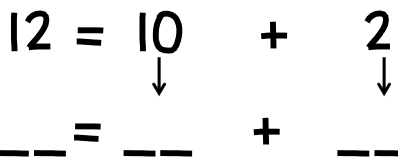
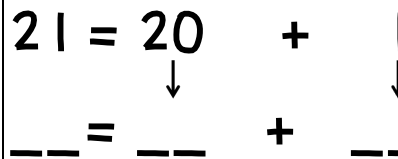
WorksheetCloud: WORKSHEET
Grade 2 Maths
Doubling

Double the number by drawing another set of dots next to it:

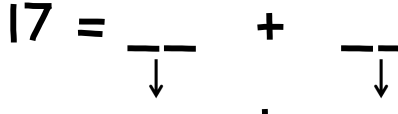
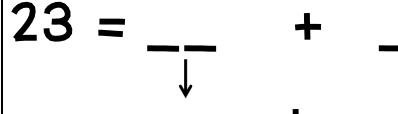
e.g. $14 = 10 + 4$ 	$11 = 10 + 1$ 
$28 = 20 + 8$ 	$___ = ___ + ___$ 

$13 = 10 + 3$ 	$16 = 10 + 6$ 
$___ = ___ + ___$ 	$___ = ___ + ___$ 

Now try to double the number without using dots:

$15 = 10 + 5$ 	$18 = 10 + 8$ 
$___ = ___ + ___$	$___ = ___ + ___$
$12 = 10 + 2$ 	$21 = 20 + 1$ 
$___ = ___ + ___$	$___ = ___ + ___$

Because you are so clever, try these on your own:

$17 = ___ + ___$ 	$23 = ___ + ___$ 
$___ = ___ + ___$	$___ = ___ + ___$