



# WorksheetCloud

Graad 4 – Wiskunde

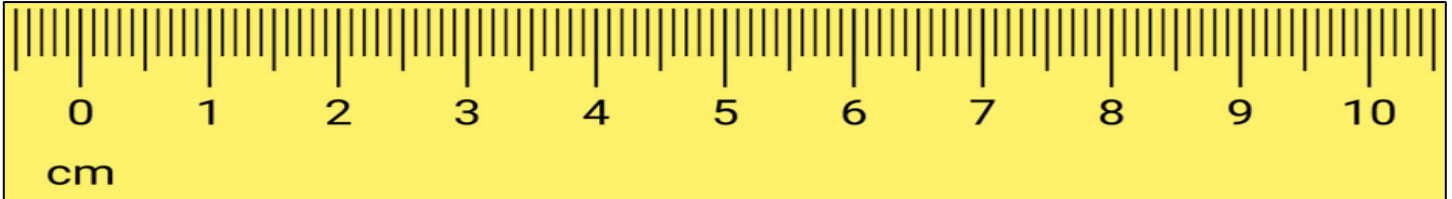
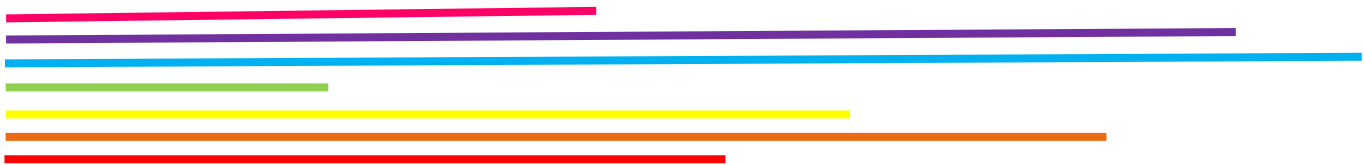
Lengte (Meting)

Aktiwiteit

1. Waarvoor staan die volgende afkortings?

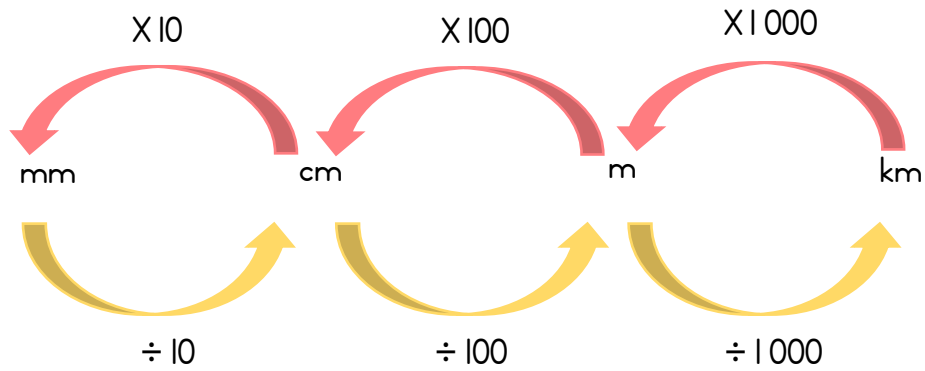
- a. mm
- b. cm
- c. m
- d. km

2. Kyk na die volgende lyne op die liniaal en voltooi die tabel:



	Antwoord in mm	Antwoord in cm
		
		
		
		
		
		
		

3. Kyk na die skaal hieronder en skryf die metings in die eenhede wat gevra word:



a. 4km = \_\_\_\_\_ m

b. 15km = \_\_\_\_\_ m

c. 28km = \_\_\_\_\_ m

c. 53km = \_\_\_\_\_ m

d. 5m = \_\_\_\_\_ cm

e. 27m = \_\_\_\_\_ cm

f. 54 m = \_\_\_\_\_ cm

g. 113m = \_\_\_\_\_ cm

h. 4cm = \_\_\_\_\_ mm

i. 7cm = \_\_\_\_\_ mm

j. 32cm = \_\_\_\_\_ mm

k.. 148cm = \_\_\_\_\_ mm

l. 80mm = \_\_\_\_\_ cm

m. 90mm = \_\_\_\_\_ cm

n. 60mm = \_\_\_\_\_ cm

o. 100mm = \_\_\_\_\_ cm

p. 1 200cm = \_\_\_\_\_ m

q. 3 600cm = \_\_\_\_\_ m

r. 8 000cm = \_\_\_\_\_ m

s. 2 500cm = \_\_\_\_\_ m

t. 8 000m = \_\_\_\_\_ km

u. 3 000m = \_\_\_\_\_ km

v. 25 000m = \_\_\_\_\_ km

w. 38 000m = \_\_\_\_\_ km