



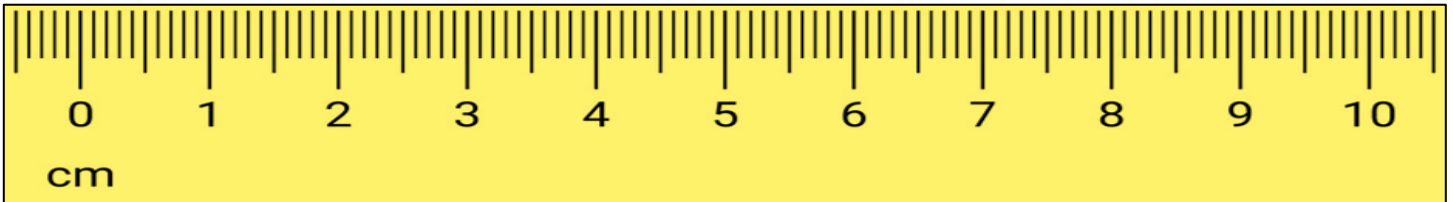
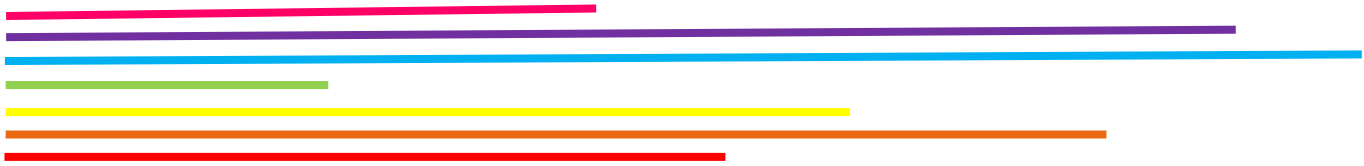
# WorksheetCloud





Graad 4 – Wiskunde

Lengte (Meting)

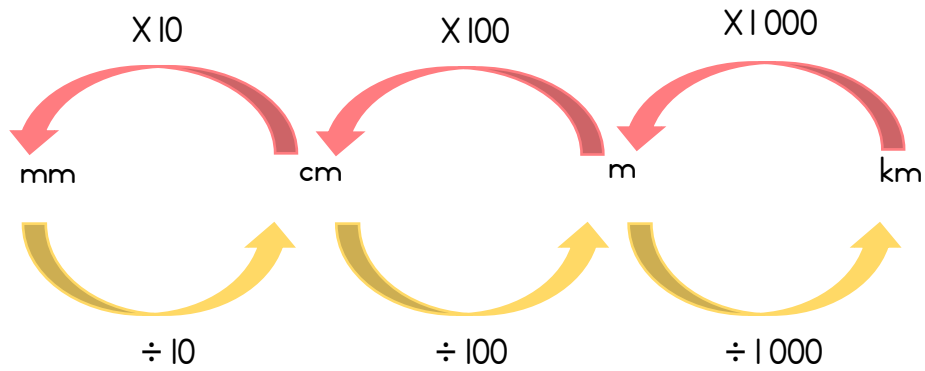
Memorandum

1. Waarvoor staan die volgende afkortings?
  - a. Millimeter
  - b. Sentimeter
  - c. Meter
  - d. Kilometer
2. Kyk na die volgende lyne op die liniaal en voltooi die tabel:



	Antwoord in mm	Antwoord in cm
	50 mm	5 cm
	80 mm	8 cm
	60 mm	6 cm
	20 mm	2 cm
	100 mm	10 cm
	90 mm	9 cm
	40 mm	4 cm

3. Kyk na die skaal hieronder en skryf die metings in die eenhede wat gevra word:



a. 4km = **4 000** m

b. 15km = **15 000** m

c. 28km = **28 000** m

c. 53km = **53 000** m

d. 5m = **500** cm

e. 27m = **2 700** cm

f. 54 m = **5 400** cm

g. 113m = **11 300** cm

h. 4cm = **40** mm

i. 7cm = **70** mm

j. 32cm = **320** mm

k.. 148cm = **1 480** mm

l. 80mm = **8** cm

m. 90mm = **9** cm

n. 60mm = **6** cm

o. 100mm = **10** cm

p. 1 200cm = **12** m

q. 3 600cm = **36** m

r. 8 000cm = **80** m

s. 2 500cm = **25** m

t. 8 000m = **8** km

u. 3 000m = **3** km

v. 25 000m = **25** km

w. 38 000m = **38** km