

<p> Put the hands on the clock and write these times</p> <p>Example a quarter to eight in the morning</p> <div style="display: flex; align-items: center;"> <div style="text-align: right;"> <p>7.45 a.m.</p> </div> </div>	<p> Write two ways of telling the time from the clocks shown. E.g. 7.35 is seven thirty-five or twenty-five to eight. Write morning, afternoon or night as well.</p>	<p> Write these days and their dates on the calendar in words then the date in numerical form.</p>																																																	
<p>1 twenty-five past one in the day</p> <div style="display: flex; align-items: center;"> <div style="text-align: right;"> <p>1.25 p.m.</p> </div> </div>	<p>7 AM</p> <p>a) eleven thirty-seven at night</p>	<table border="1" style="width: 100%; text-align: center; border-collapse: collapse;"> <tr><th colspan="7">AUGUST 2013</th></tr> <tr><th>S</th><th>M</th><th>T</th><th>W</th><th>T</th><th>F</th><th>S</th></tr> <tr><td></td><td></td><td></td><td></td><td>1</td><td>2</td><td>3</td></tr> <tr><td>4</td><td>5</td><td>6</td><td>7</td><td>8</td><td style="border: 2px solid blue; border-radius: 50%;">9</td><td>10</td></tr> <tr><td style="border: 2px solid blue; border-radius: 50%;">11</td><td>12</td><td>13</td><td>14</td><td>15</td><td>16</td><td>17</td></tr> <tr><td>18</td><td>19</td><td>20</td><td style="border: 2px solid blue; border-radius: 50%;">21</td><td>22</td><td>23</td><td>24</td></tr> <tr><td>25</td><td>26</td><td>27</td><td>28</td><td style="border: 2px solid green; border-radius: 50%;">29</td><td>30</td><td>31</td></tr> </table>	AUGUST 2013							S	M	T	W	T	F	S					1	2	3	4	5	6	7	8	9	10	11	12	13	14	15	16	17	18	19	20	21	22	23	24	25	26	27	28	29	30	31
AUGUST 2013																																																			
S	M	T	W	T	F	S																																													
				1	2	3																																													
4	5	6	7	8	9	10																																													
11	12	13	14	15	16	17																																													
18	19	20	21	22	23	24																																													
25	26	27	28	29	30	31																																													
<p>2 four thirty-five in the afternoon</p> <div style="display: flex; align-items: center;"> <div style="text-align: right;"> <p>4.35 p.m.</p> </div> </div>	<p>8 AM</p> <p>a) six forty-nine in the morning</p>	<p>Example </p> <p>Thursday 29th August, 2013</p> <p style="text-align: right;">29/08/13</p>																																																	
<p>3 twelve minutes to twelve at night</p> <div style="display: flex; align-items: center;"> <div style="text-align: right;"> <p>11.48 p.m.</p> </div> </div>	<p>9 AM</p> <p>a) twelve fifty-three in the morning</p>	<p>12 Wednesday 21st August, 2013</p> <p style="text-align: right;">21/08/13</p>																																																	
<p>4 half past three in the morning</p> <div style="display: flex; align-items: center;"> <div style="text-align: right;"> <p>3.30 a.m.</p> </div> </div>	<p>10 AM</p> <p>a) Five thirty in the afternoon</p>	<p>13 Sunday 11th August, 2013</p> <p style="text-align: right;">11/08/13</p>																																																	
<p>5 twenty past six at dusk</p> <div style="display: flex; align-items: center;"> <div style="text-align: right;"> <p>6.20 p.m.</p> </div> </div>	<p>b) seven minutes to one in the morning</p>	<p>14 Friday 9th August, 2013</p> <p style="text-align: right;">09/08/13</p>																																																	
<p>6 a quarter to five at dawn</p> <div style="display: flex; align-items: center;"> <div style="text-align: right;"> <p>4.45 a.m.</p> </div> </div>	<p>11 AM</p> <p>a) twelve forty-five in the day</p>	<p>15 The date 9 days before </p> <p>Wednesday 31st July, 2013</p> <p style="text-align: right;">31/07/13</p>																																																	
	<p>b) half past five in the afternoon</p>	<p>16 The date 15 days after </p> <p>Thursday 5th September, 2013</p> <p style="text-align: right;">05/09/13</p>																																																	
	<p>b) a quarter to one in the day</p>	<p>17 The date 10 days after </p> <p>Sunday 8th September, 2013</p> <p style="text-align: right;">08/09/13</p>																																																	
		<p>18 The date 20 days before </p> <p>Monday 22nd July, 2013</p> <p style="text-align: right;">02/07/13</p>																																																	



Change these times to 24 hour time format. (from 1 p.m. add 12 hours)

Example

4.45 p.m. 1645 hours

1 3 a.m. 0300 hours

2 7 a.m. 0700 hours

3 5 p.m. 1700 hours

4 11.25 a.m. 1125 hours

5 3.52 p.m. 1552 hours

6 5.17 p.m. 1717 hours

7 8.47 p.m. 2047 hours

8 noon 1200 hours

9 4.56 a.m. 0456 hours

10 12.19 a.m. 0019 hours

11 10.25 p.m. 2225 hours

12 midnight 0000 hours

13 8.20 p.m. 2020 hours

14 9.55 a.m. 2155 hours

15 11.39 p.m. 2339 hours

16  1527 hours

17  0038 hours

Change the times to a.m./p.m. format. If the time starts with 13 or more, subtract 12 and write p.m.



Example

1548 hours 3.48 p.m.

18 0400 hours 4 a.m.

19 0945 hours 9.45 a.m.

20 1320 hours 1.20 p.m.

21 1717 hours 5.17 p.m.

22 2002 hours 8.02 p.m.

23 2211 hours 10.11 p.m.

24 1539 hours 3.39 p.m.

25 2347 hours 11.47 p.m.

26 0016 hours 12.16 a.m.

27 0303 hours 3.03 a.m.

28 1956 hours 7.56 p.m.

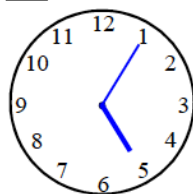
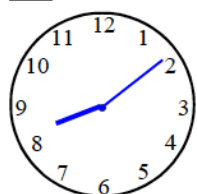
29 2200 hours 10 p.m.

30 0000 hours 12 a.m.

31 0222 hours 2.22 a.m.

32 1833 hours 6.33 p.m.

33 2008 hours 34 0505 hours

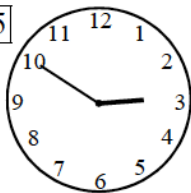


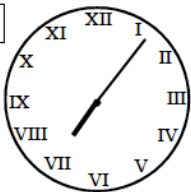
Circle: am pm

Circle: am pm



Write the times below in 24 hour format

35  afternoon 1450 hours

36  evening 1907 hours


37 A quarter to ten at night 2145 hours

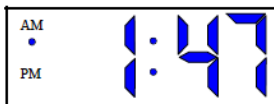
38 Eleven forty-seven (day) 1147 hours


39 Half past twelve at night 0030 hours



Write/colour the times in a.m./ p.m. format

40 1556 hours 

41 0147 hours 

42  2218 hours night
time of day (words)

43 0855 hours Five to nine in the morning

write answer in words & the time of the day
e.g. afternoon, evening, morning etc