

## WorksheetCloud: MEMORANDUM

Grade: 3

Subject: Maths

Topic: Time 2

Answer the questions carefully.

1a. How many seconds in a minute? **60 seconds**

b. How many minutes in an hour? **60 minutes**

c. How many hours in a day? **24 hours**

d. How many days in a week? **7 days**

e. How many months in a year? **12 months**

2. Label these activities using **am** OR **pm**.

a. I wake up and get ready for school. **am**

b. I eat supper. **pm**

c. I do my homework. **pm**

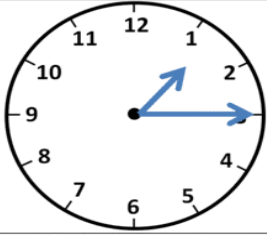
d. I drive to school. **am**

e. I eat breakfast. **am**

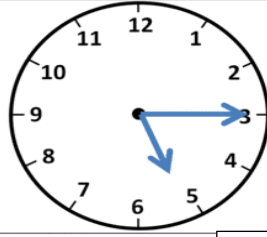
f. I go to bed after supper. **pm**

g. I have lunch at 12:00 midday. **pm**

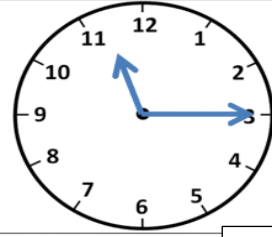
#### 4. What is the time?



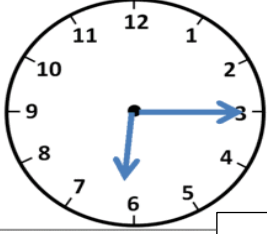
Quarter past 1



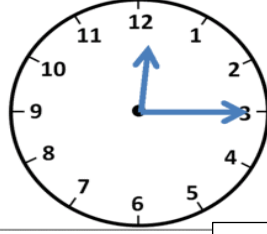
Quarter past 5



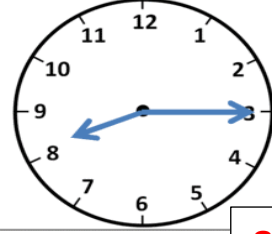
Quarter past 11



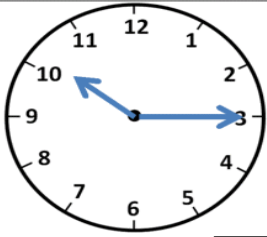
Quarter past 6



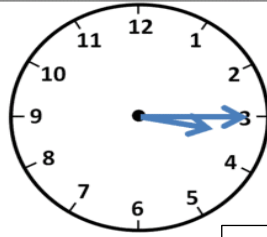
Quarter past 12



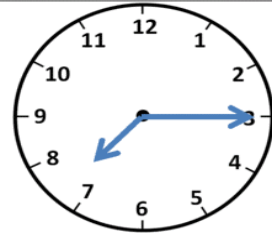
Quarter past 8



Quarter past 10

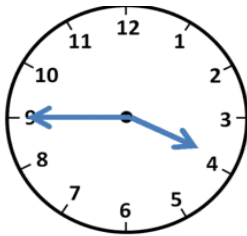


Quarter past 3

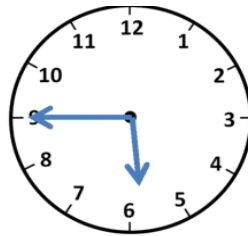


Quarter past 7

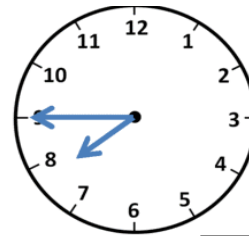
#### 5. What time is it?



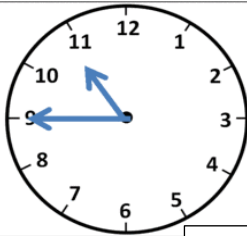
Quarter to 4



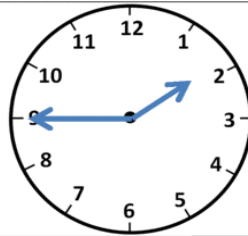
Quarter to 6



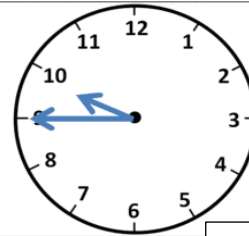
Quarter to 8



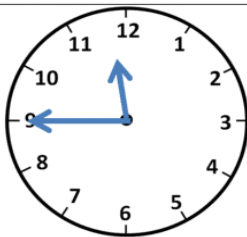
Quarter to 11



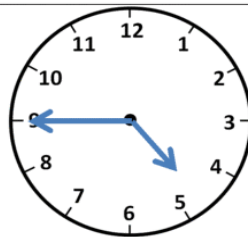
Quarter to 2



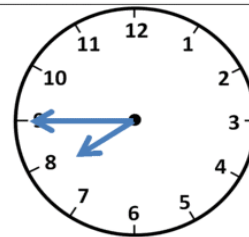
Quarter to 10



Quarter to 12

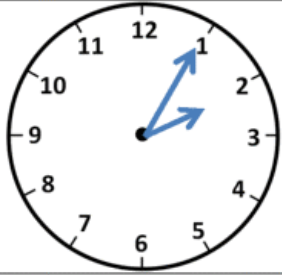


Quarter to 5

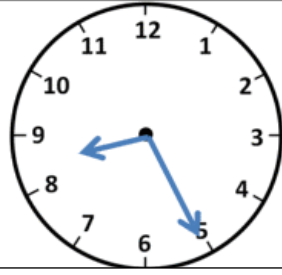


Quarter to 8

**6. What time is it?** The first example can also be written: 5 past 2



**2:05**



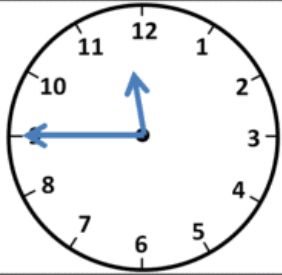
**25 past 8 8:25**



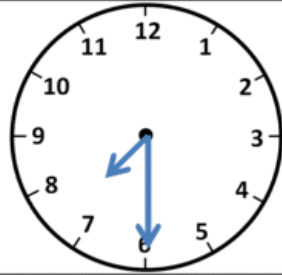
**10 past 7 7:10**



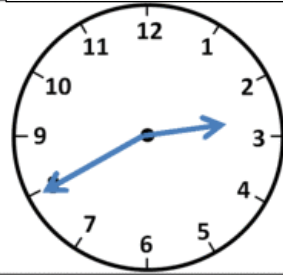
**10 to 4 3:50**



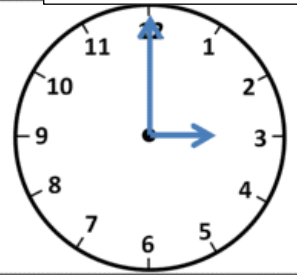
**Quarter to 12 11:45**



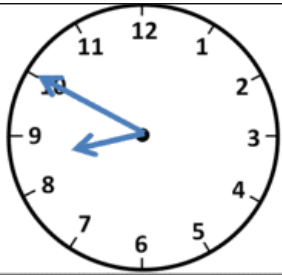
**half past 7 7:30**



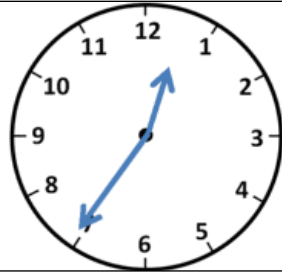
**20 to 3 2:40**



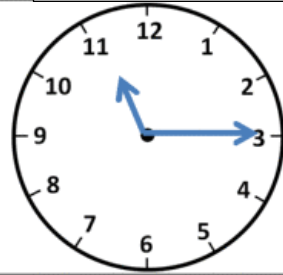
**3 o'clock 3:00**



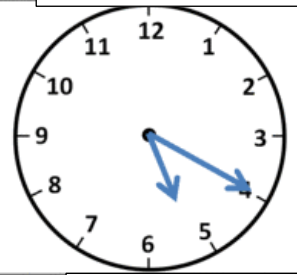
**10 to 9 8:50**



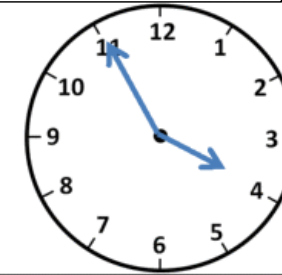
**25 to 1 12:35**



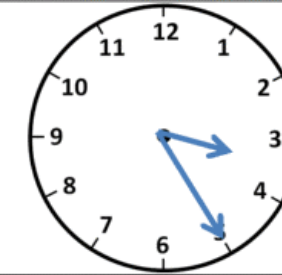
**quarter past 11 11:15**



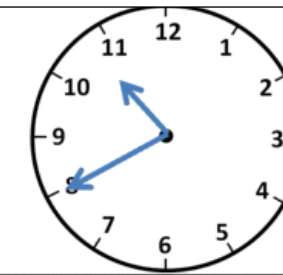
**20 past 5 5:20**



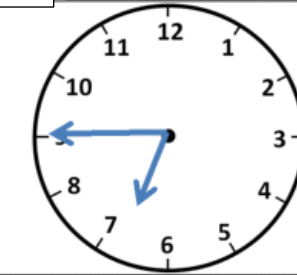
**5 to 4 3:55**



**25 past 3 3:25**



**20 to 11 10:40**



**quarter to 7 6:45**