

WorksheetCloud: WORKSHEET

Grade: 3

Subject: Maths

Topic: Time 2

Answer the questions carefully.

1a. How many seconds in a minute? _____

b. How many minutes in an hour? _____

c. How many hours in a day? _____

d. How many days in a week? _____

e. How many months in a year? _____

2. Label these activities using **am OR **pm**.**

a. I wake up and get ready for school. _____

b. I eat supper. _____

c. I do my homework. _____

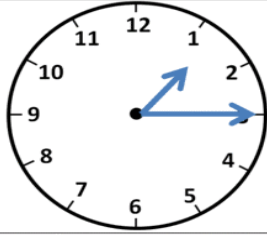
d. I drive to school. _____

e. I eat breakfast. _____

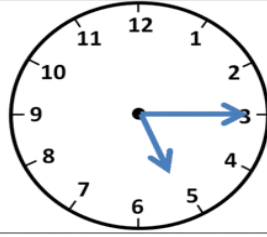
f. I go to bed after supper. _____

g. I have lunch at 12:00 midday. _____

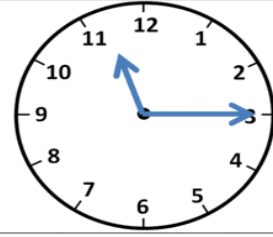
4. What is the time?



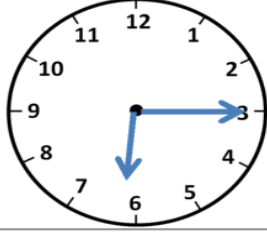
Quarter past 1



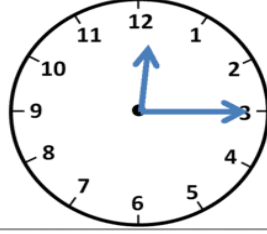
Quarter past ____



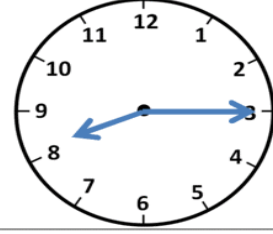
Quarter past ____



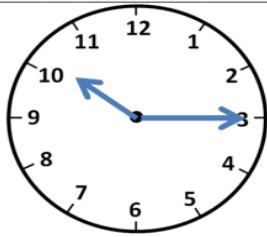
Quarter past ____



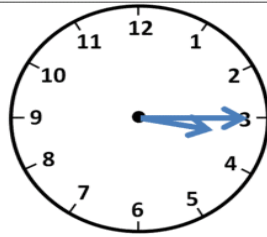
Quarter past ____



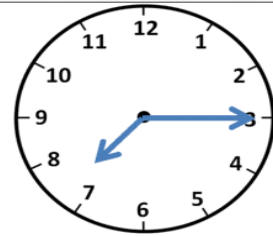
Quarter past ____



Quarter past ____

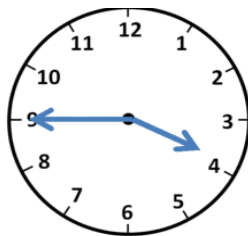


Quarter past ____

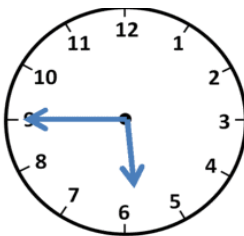


Quarter past ____

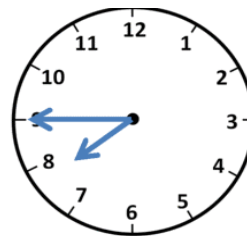
5. What time is it?



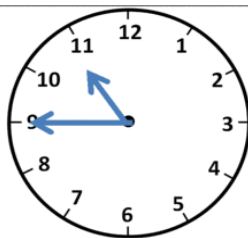
Quarter to 4



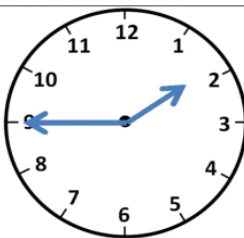
Quarter to ____



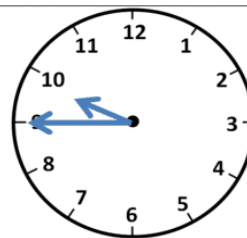
Quarter to ____



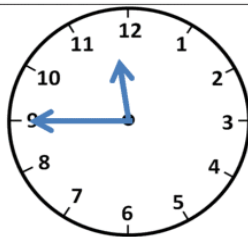
Quarter to ____



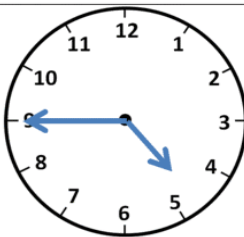
Quarter to ____



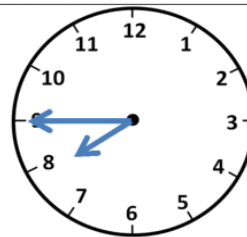
Quarter to ____



Quarter to ____

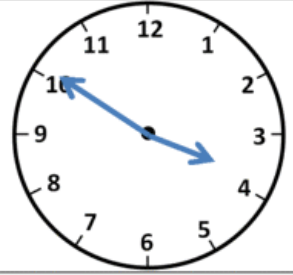
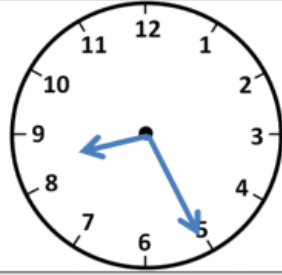
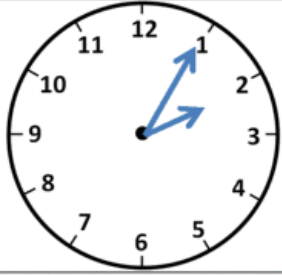


Quarter to ____



Quarter to ____

6. What time is it? The first example can also be written: 5 past 2



2:05

