

# Let's count!

Complete the following number patterns:







Count in 2's									
46	48	50							









Count in 5's									
60	65	70							







Count in 10's									
17	27	37							

Count backwards in 1's									
67	66	65							

Complete the following patterns by drawing the shapes :

									
---	---	---	---	---	---	--	--	--	--

									
---	---	---	---	---	---	--	---	--	--

											
---	---	---	---	---	---	--	--	--	--	--	--