






WorksheetCloud: WORKSHEET

Grade 2

Maths

Working with numbers 2

1	2	3	4	5	6	7	8	9	10
11		13	14	15	16	17	18	19	20
21	22	23	24	25	26	27	28		30
31	32	33	34	35	36	37	38	39	40
41	42	43	44		46	47	48	49	50
51	52	53	54	55	56	57	58	59	
61	62	63	64	65	66	67	68	69	70
71	72	73		75	76	77	78	79	80
81	82	83	84	85	86	87	88	89	90
91	92	93	94	95	96	97	98	99	100

What number is hiding behind these pictures:











Write the number names of these numbers:











What is 2 more?











Write these 5 numbers from biggest to smallest:

Write these 5 numbers from smallest to biggest:
