

WorksheetCloud:Aktiwiteit


Graad 3

Wiskunde

Vermenigvuldig


Skryf 'n getaltesin vir elke prentjie. Kyk na die eerste voorbeeld om jou te help.

1




$3 \times 4 = 12$ or $4 \times 3 = 12$		
--	--	--

2




--	--	--

3



$3 \times 4 = 12$ $4 \times 3 = 12$		
--	--	--

4



$3 \times 4 = 12$ $4 \times 3 = 12$ $12 \div 3 = 4$ $12 \div 4 = 3$		
--	--	--