




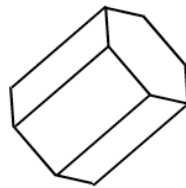
Name these 3-D solids



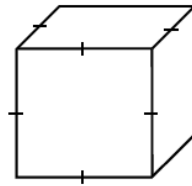
1 Rectangular prism



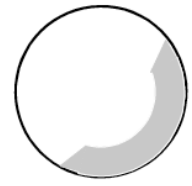
2 Cone



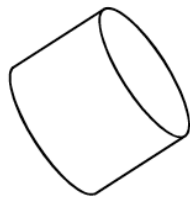
3 Hexagonal prism



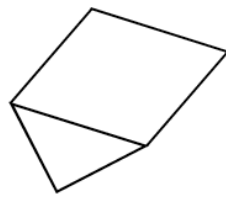
4 Cube



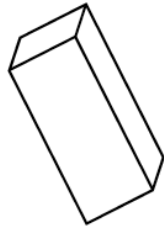
5 Sphere



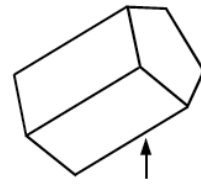
6 Cylinder



7 Triangular prism



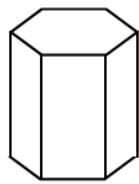
8 Rectangular prism



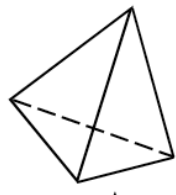
9 Pentagonal prism



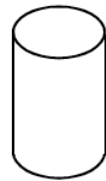
10 Hexagonal pyramid



11 Hexagonal prism



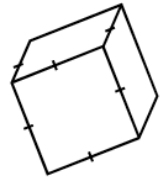
12 Triangular pyramid



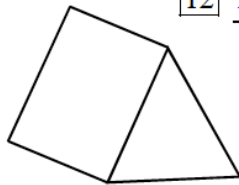
13 Cylinder



14 Square pyramid



15 Cube



16 Triangular prism



17 Cone



18 Pentagonal pyramid



19 Octagonal prism



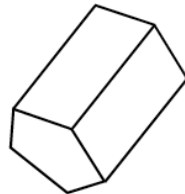
20 Rectangular prism



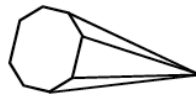
21 Triangular Pyramid



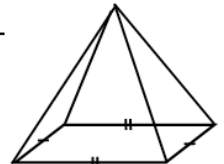
22 Hemisphere



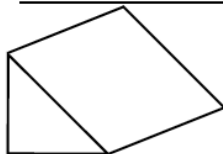
23 Pentagonal Prism



24 Octagonal pyramid



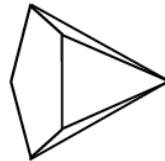
25 Rectangular pyramid




26 Triangular prism



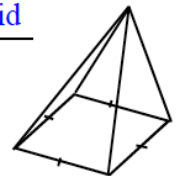
27 Cone



28 Pentagonal pyramid



29 Cylinder



30 Square pyramid