

WorksheetCloud: WORKSHEET

Grade: 3

Subject: Maths

Topic: Perimeter and Area

The questions below are based on what was covered in the video.

1. Choose the correct word from the box to complete the sentences.

a. _____ is the measurement around the edge of a shape.

b. _____ is the amount of square units it takes to cover a 2-dimensional shape.

Area Perimeter


2. True or False?

a. When we buy tiles for a veranda, we would need to know the area of the veranda. _____

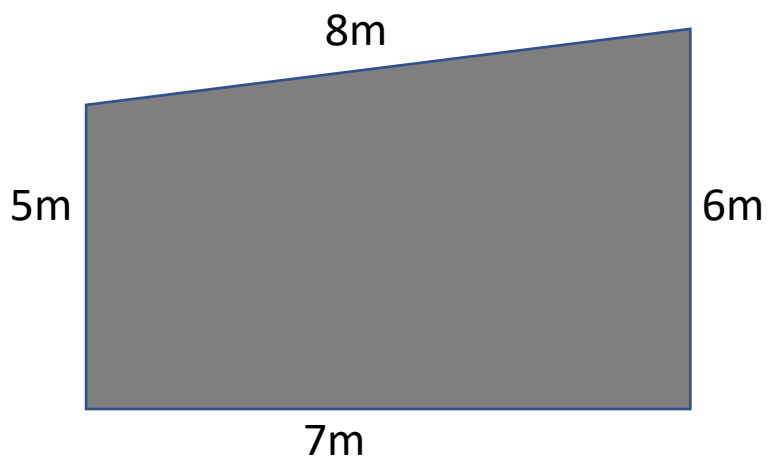
b. To fence the garden, Dad would need to measure the perimeter of the garden. _____

3. Answer the questions below.

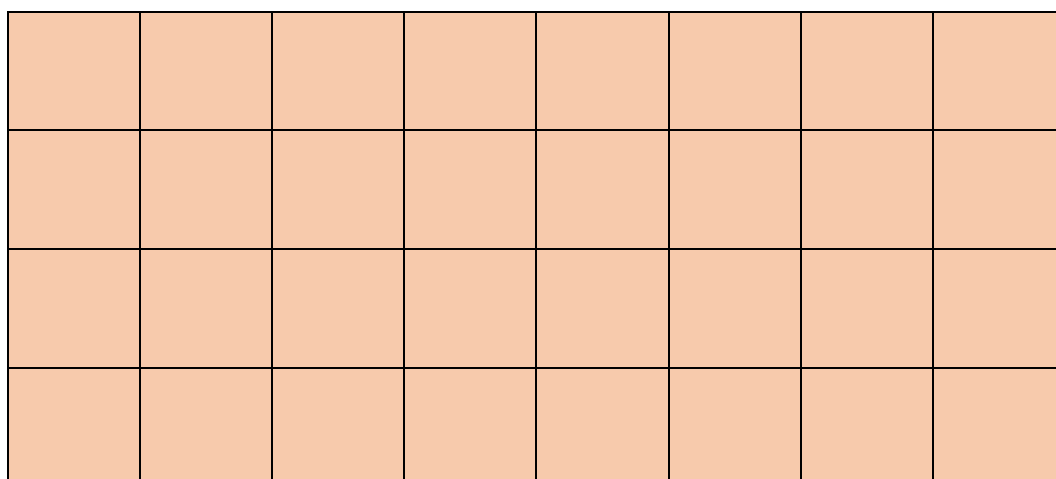
a. What is the perimeter of the swimming pool? Show your working.



b. What is the perimeter of this shape? Show your working.



c. What is the area of this classroom floor in square units? Show your working.



d. What is the area of this swimming pool in square metres? Show your working.

