


WorksheetCloud: MEMORANDUM

Grade 2 Maths

Groups of 3


1. Count how many wheels there are on 3 tricycles:



Make groups of 3, by drawing circles around the tricycles: There are 3 groups of 3.

Now write it as a sum: $3 \times 3 = 9$


2. Count how many flowers there are in 4 groups:



Make groups of 3, by drawing circles around the flowers: There are 4 groups of 3.

Now write it as a sum: $4 \times 3 = 12$

3. Count how many apples there are in 5 baskets:



Make groups of 3, by drawing circles around the baskets: There are 5 groups of 3.

Now write it as a sum: $5 \times 3 = 15$

4. Write a sum for every line:

1 group of 3: $1 \times 3 = 3$

6 groups of 3: $6 \times 3 = 18$

2 groups of 3: $2 \times 3 = 6$

7 groups of 3: $7 \times 3 = 21$

3 groups of 3: $3 \times 3 = 9$

8 groups of 3: $8 \times 3 = 24$

4 groups of 3: $4 \times 3 = 12$

9 groups of 3: $9 \times 3 = 27$

5 groups of 3: $5 \times 3 = 15$

10 groups of 3: $10 \times 3 = 30$