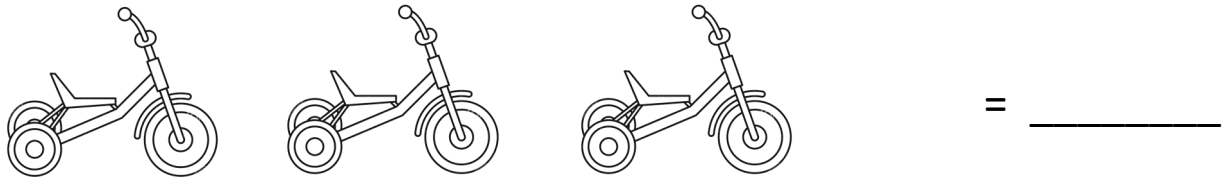


WorksheetCloud: Worksheet
Grade 2 Maths
Groups of 3


1. Count how many wheels there are on 3 tricycles:



Make groups of 3, by drawing circles around the tricycles: There are ___ groups of 3.

Now write it as a sum: ___ x 3 = _____


2. Count how many flowers there are in 4 groups:



Make groups of 3, by drawing circles around the flowers: There are ___ groups of 3.

Now write it as a sum: ___ x 3 = _____

3. Count how many apples there are in 5 baskets:



Make groups of 3, by drawing circles around the baskets: There are ___ groups of 3.

Now write it as a sum: ___ x 3 = _____

4. Write a sum for every line:

1 group of 3: ___ x 3 = _____

6 groups of 3: ___ x 3 = _____

2 groups of 3: ___ x 3 = _____

7 groups of 3: ___ x 3 = _____

3 groups of 3: ___ x 3 = _____

8 groups of 3: ___ x 3 = _____

4 groups of 3: ___ x 3 = _____

9 groups of 3: ___ x 3 = _____

5 groups of 3: ___ x 3 = _____

10 groups of 3: ___ x 3 = _____