


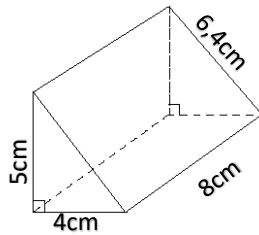


Grade 8 - Mathematics Surface Area and Volume 2

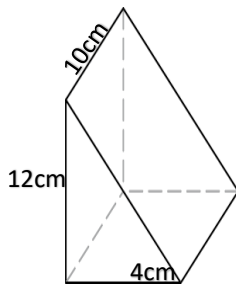


Activity

1. Calculate surface area of the following triangular prism.



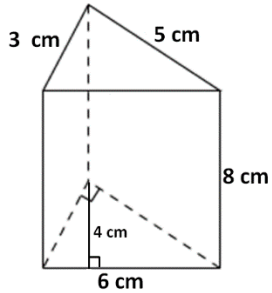
2. Calculate the surface area of the following triangular prism.





WorksheetCloud

3. Calculate the surface area of the following triangular prism



4. Calculate the surface area of a triangular prism with the following measurements. The isosceles triangular base has a base of 6cm and a height of 8cm. The prism has a Height of 12cm.