




**Subject:** Grade 4 Mathematics  
**Topic:** Properties of 2D Shapes  
**Total:** 31 Marks

**Name:** \_\_\_\_\_

**Date:** \_\_\_\_\_

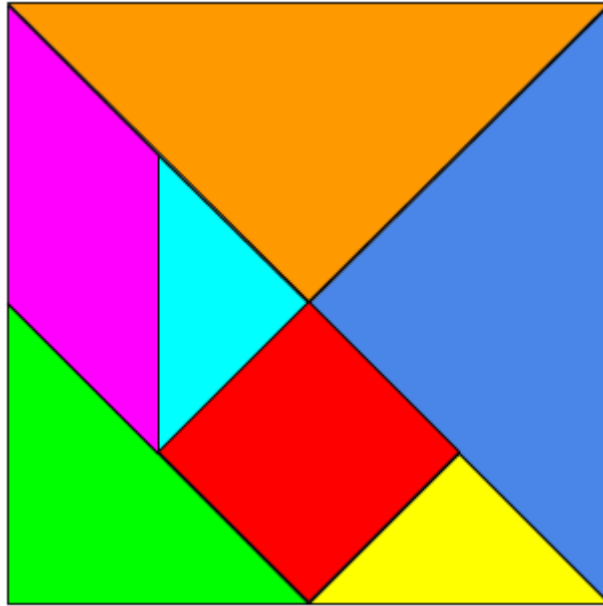
This image refers to question: 1



**Question 1: Text Input**  
A pentagon has ... sides.

3 marks

**This image refers to question: 2**




**Question 2: Multiple Choice**

4 marks

There are ... squares in this diagram.

- |          |   |
|----------|---|
| <b>A</b> | 2 |
| <b>B</b> | 3 |
| <b>C</b> | 4 |
| <b>D</b> | 5 |

**This image refers to question: 3**



**Question 3: True/False**

2 marks

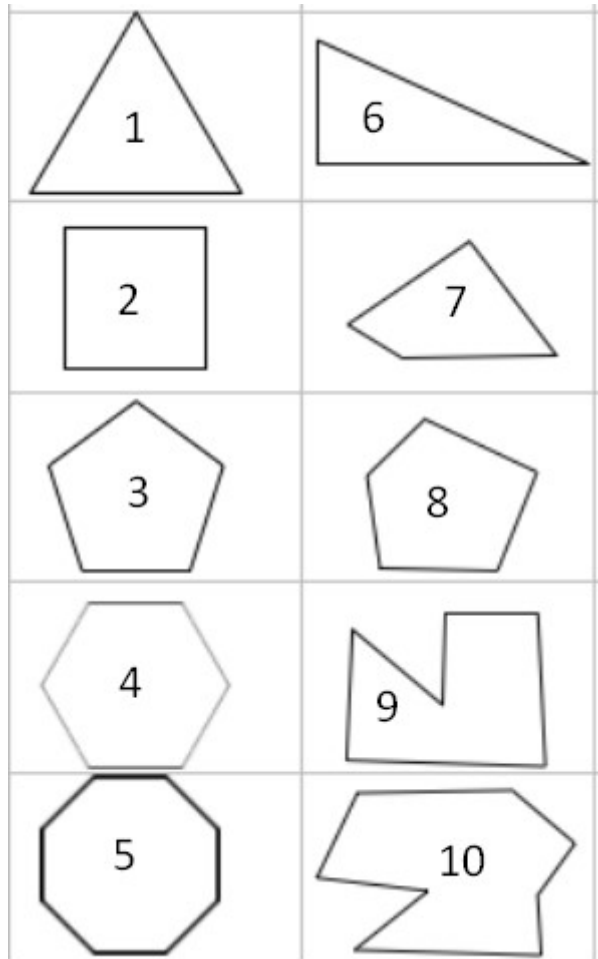
The shapes that form this fence are **quadrilaterals**.

**TRUE**

**FALSE**

---

**This image refers to question: 4, 5**



**Question 4: Please Fill In The Blanks**

4 marks

Number 3 is (1) shape called a (2).

Possible Answers: an irregular | a regular | hexagon | pentagon

<b>1</b>	
----------	--

<b>2</b>	
----------	--

**Question 5: Please Fill In The Blanks**

4 marks

Number 4 is (1) shape called a (2).

Possible Answers: an irregular | a regular | hexagon | pentagon

<b>1</b>	
----------	--

<b>2</b>	
----------	--

**Question 6: True/False**

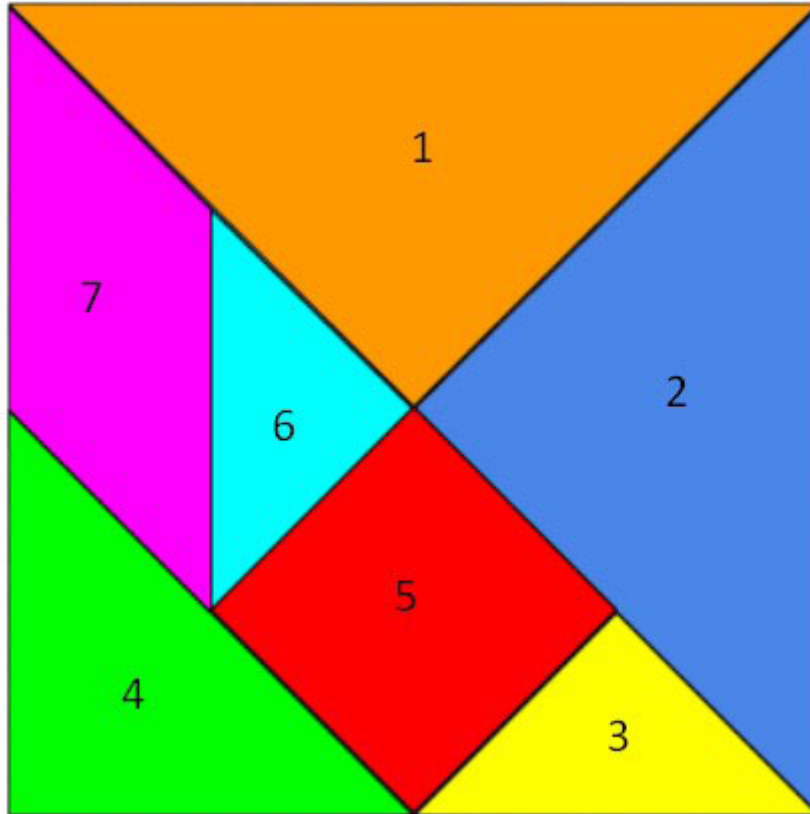
2 marks

A polygon is a closed shape with straight sides.

**TRUE**

**FALSE**

**This image refers to question: 7**



**Question 7: True/False**

2 marks

Shapes 3 and 5 together make a quadrilateral.

**TRUE**

**FALSE**

**Question 8: Multiple Choice**

4 marks

A quadrilateral has ... sides.

- |          |   |
|----------|---|
| <b>A</b> | 3 |
| <b>B</b> | 4 |
| <b>C</b> | 5 |
| <b>D</b> | 6 |


**Question 9: True/False**

2 marks

A pentagon is a shape that has **five equal sides only**.

- |             |              |
|-------------|--------------|
| <b>TRUE</b> | <b>FALSE</b> |
|-------------|--------------|

**This image refers to question: 10**



**Question 10: Please Fill In The Blanks**

4 marks

Shape A is a (1) .

Shape B is a (2) .

Possible Answers: pyramid | square | triangle | triangular prism | rectangle

<b>1</b>	
----------	--

<b>2</b>	
----------	--

---

**Total: 31 Marks**